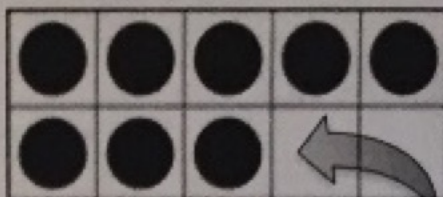



Making 10 to Add!

Use the 10-frame to make 10 and add.

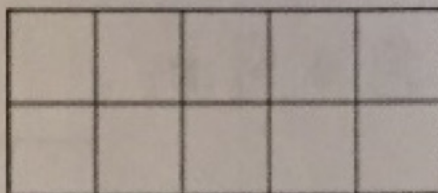
1. $8 + 3 =$ _____



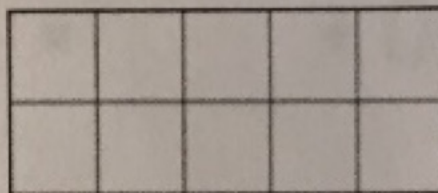
$10 +$ _____ $=$ _____




2. $8 + 5 =$ _____




$10 +$ _____ $=$ _____



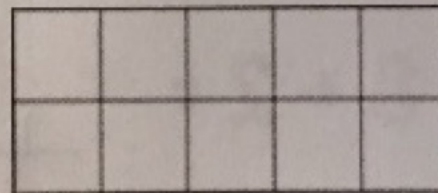
3. $8 + 7 =$ _____



$10 +$ _____ $=$ _____



4. $8 + 4 =$ _____



$10 +$ _____ $=$ _____

